

35



参考答案

Weilai study
未来思维

儿童拓展系列A级(上)



数量




图形



思考



逻辑



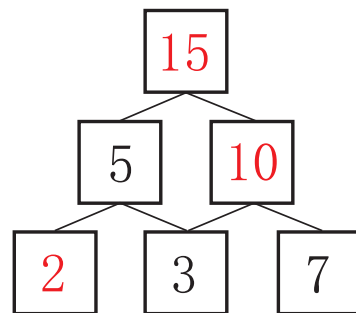
答案

35-1 ● 20~30的合成与分解 ①...P1

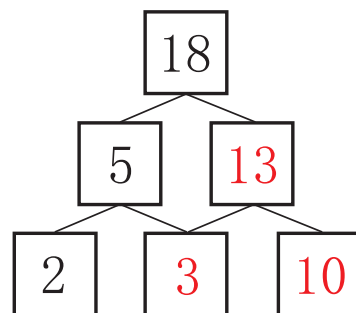
$$\begin{array}{r}
 \boxed{5} + \boxed{8} + \boxed{8} = \boxed{21} \\
 + \quad + \quad + \\
 \boxed{11} + \boxed{12} + \boxed{7} = \boxed{30} \\
 + \quad + \quad + \\
 \boxed{10} + \boxed{10} + \boxed{12} = \boxed{32} \\
 \parallel \quad \parallel \quad \parallel \\
 \boxed{26} \quad \boxed{30} \quad \boxed{27}
 \end{array}$$

35-1 ● 加法与减法 ①...P2

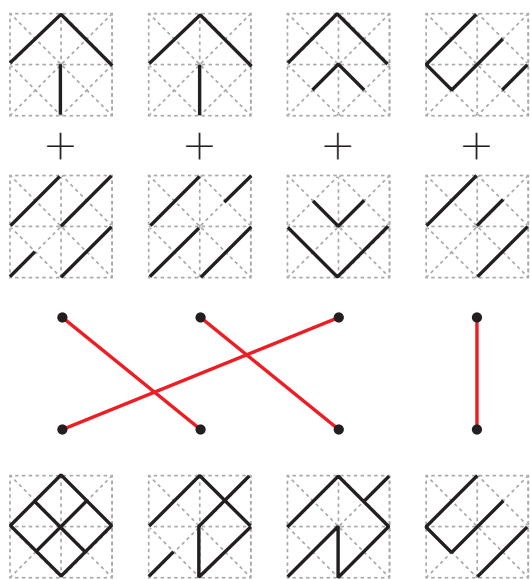
(1)



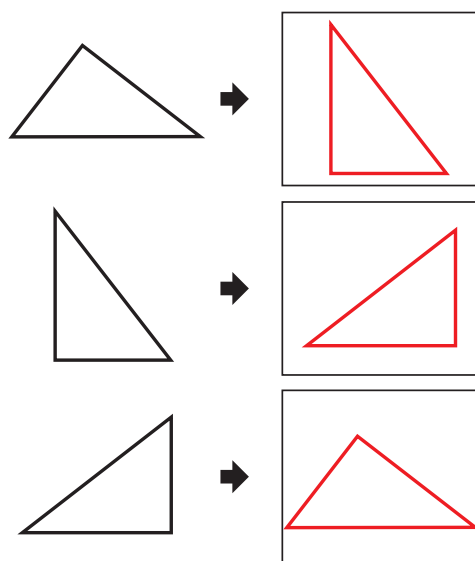
(2)



35-1 ● 图形的合成 ①...P5

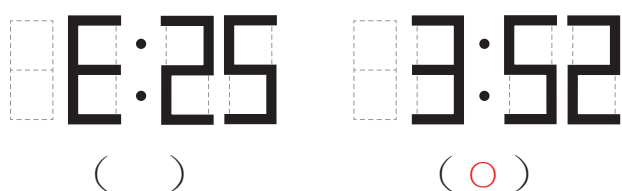
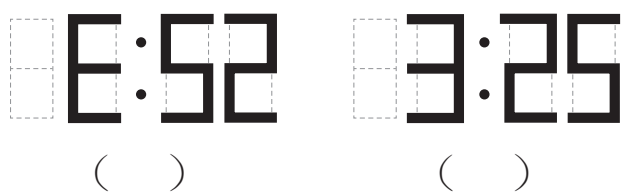


35-1 ● 旋转 ①...P6



答案

35-1 ● 镜子与时钟 ①...P7



35-2 ● 20~30的合成与分解 ②...P8

$$\begin{array}{|c|} \hline 5 \\ \hline \end{array} + \begin{array}{|c|} \hline 10 \\ \hline \end{array} + \begin{array}{|c|} \hline 14 \\ \hline \end{array} = \begin{array}{|c|} \hline 29 \\ \hline \end{array}$$

$$\begin{array}{|c|} \hline 10 \\ \hline \end{array} + \begin{array}{|c|} \hline 15 \\ \hline \end{array} + \begin{array}{|c|} \hline 4 \\ \hline \end{array} = \begin{array}{|c|} \hline 29 \\ \hline \end{array}$$

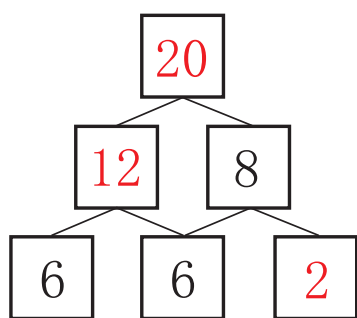
$$\begin{array}{|c|} \hline 10 \\ \hline \end{array} + \begin{array}{|c|} \hline 3 \\ \hline \end{array} + \begin{array}{|c|} \hline 10 \\ \hline \end{array} = \begin{array}{|c|} \hline 23 \\ \hline \end{array}$$

|| || ||

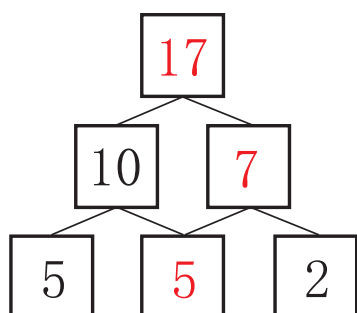
$\begin{array}{|c|} \hline 25 \\ \hline \end{array}$ $\begin{array}{|c|} \hline 28 \\ \hline \end{array}$ $\begin{array}{|c|} \hline 28 \\ \hline \end{array}$

35-2 ● 加法与减法 ②...P9

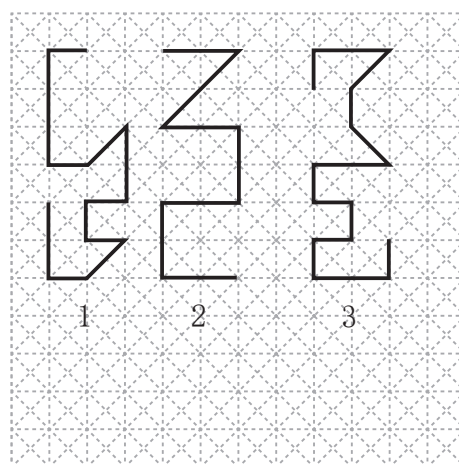
(1)



(2)



35-2 ● 长度顺序 ①...P12

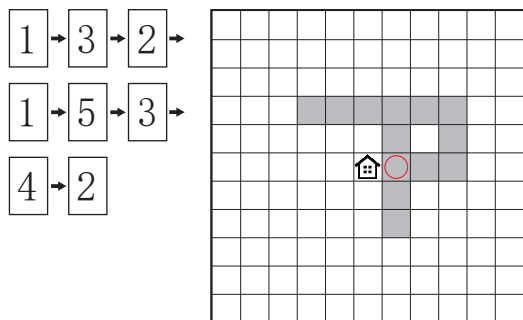


(3)


答案

35-2 ● 迷宫①...P13

【移动的顺序】



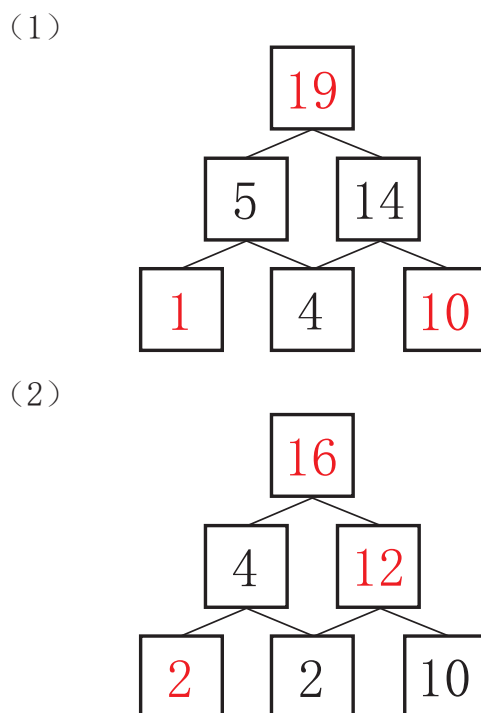
35-2 ● 骰子的点数①...P14



35-3 ● 20~30的合成与分解③...P15

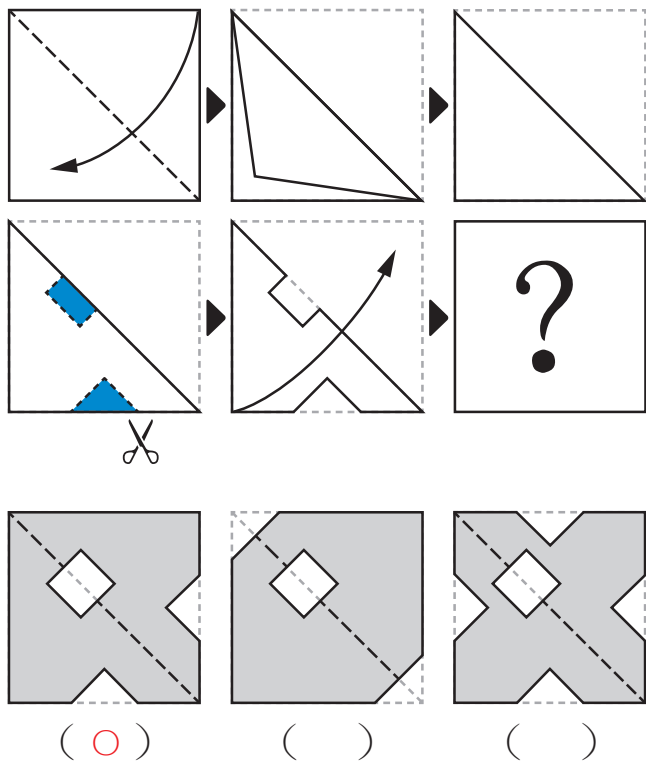
$$\begin{array}{r}
 \boxed{2} + \boxed{15} + \boxed{10} = \boxed{27} \\
 + \quad + \quad + \\
 \boxed{5} + \boxed{4} + \boxed{8} = \boxed{17} \\
 + \quad + \quad + \\
 \boxed{18} + \boxed{2} + \boxed{12} = \boxed{32} \\
 \parallel \quad \parallel \quad \parallel \\
 \boxed{25} \quad \boxed{21} \quad \boxed{30}
 \end{array}$$

35-3 ● 加法与减法③...P16

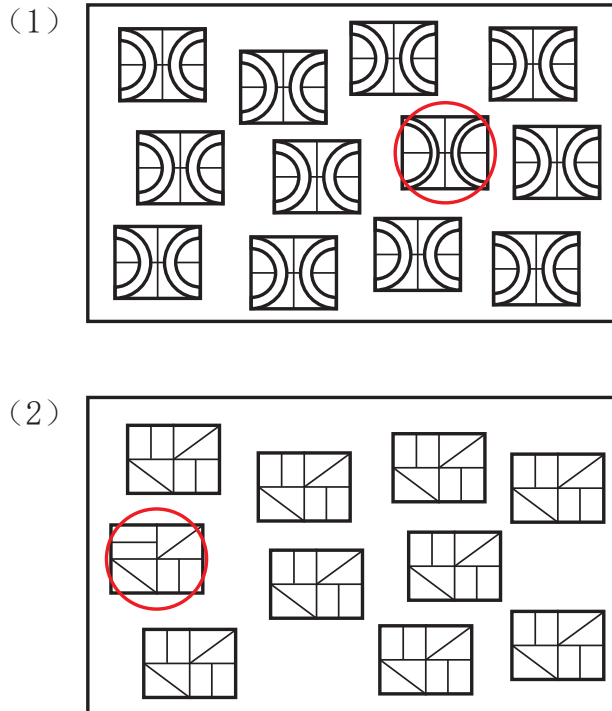


答案

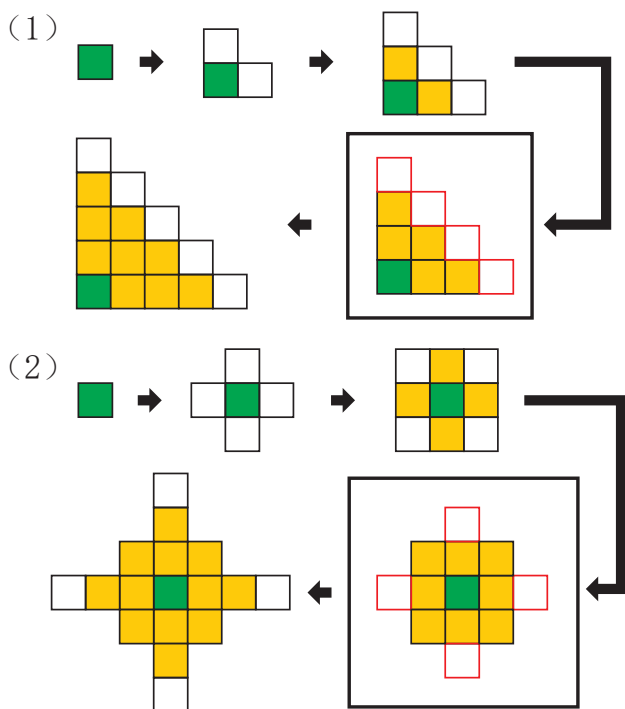
35-3 ●折纸 ①...P18



35-3 ●比较 (颜色、形状等) ①...P19

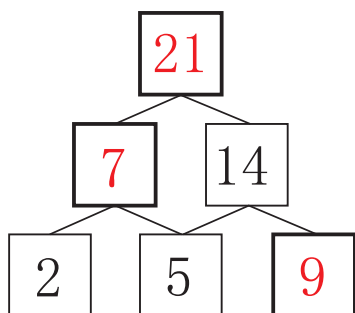


35-3 ●找规律 ①...P20

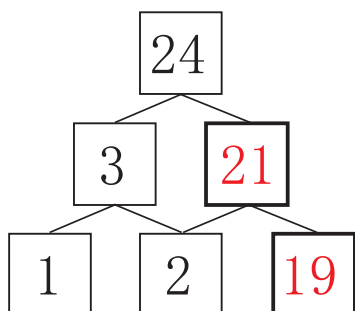


1

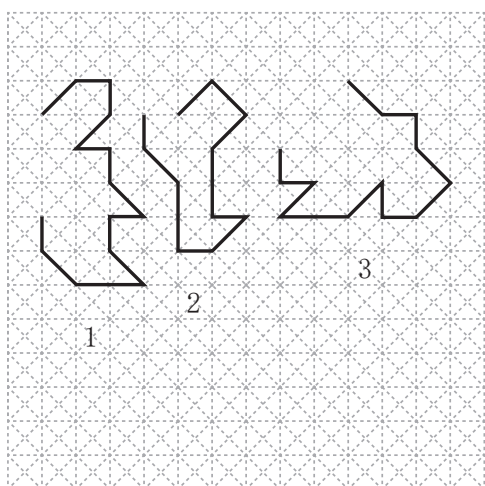
(1)



(2)

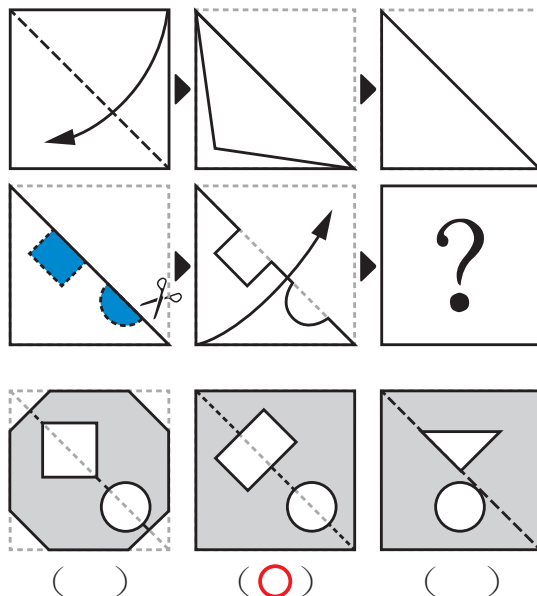


3

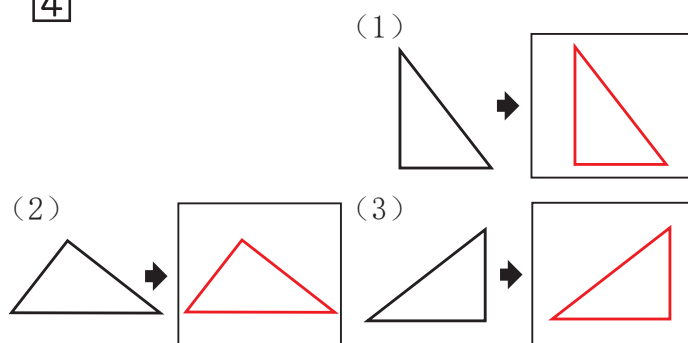


(1)

2



4



5

【移动的顺序】

